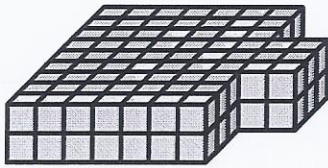
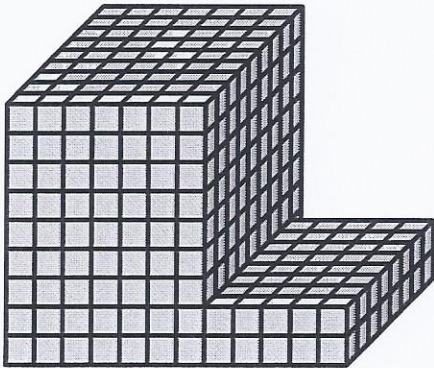


Find the total volume of each figure. Measurement is in cm (not to scale).

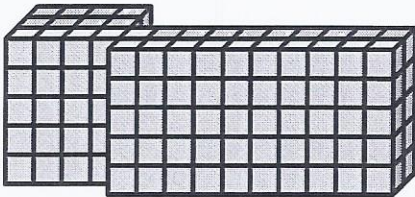
1)



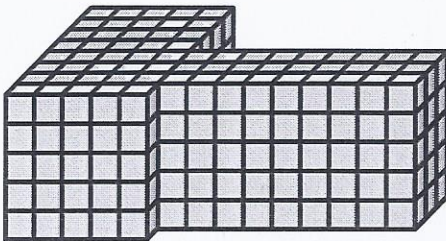
2)



3)



4)



Answers

1. _____

2. _____

3. _____

4. _____

5. _____